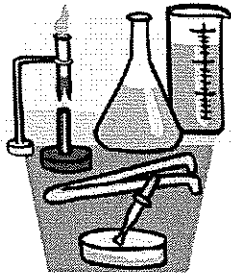


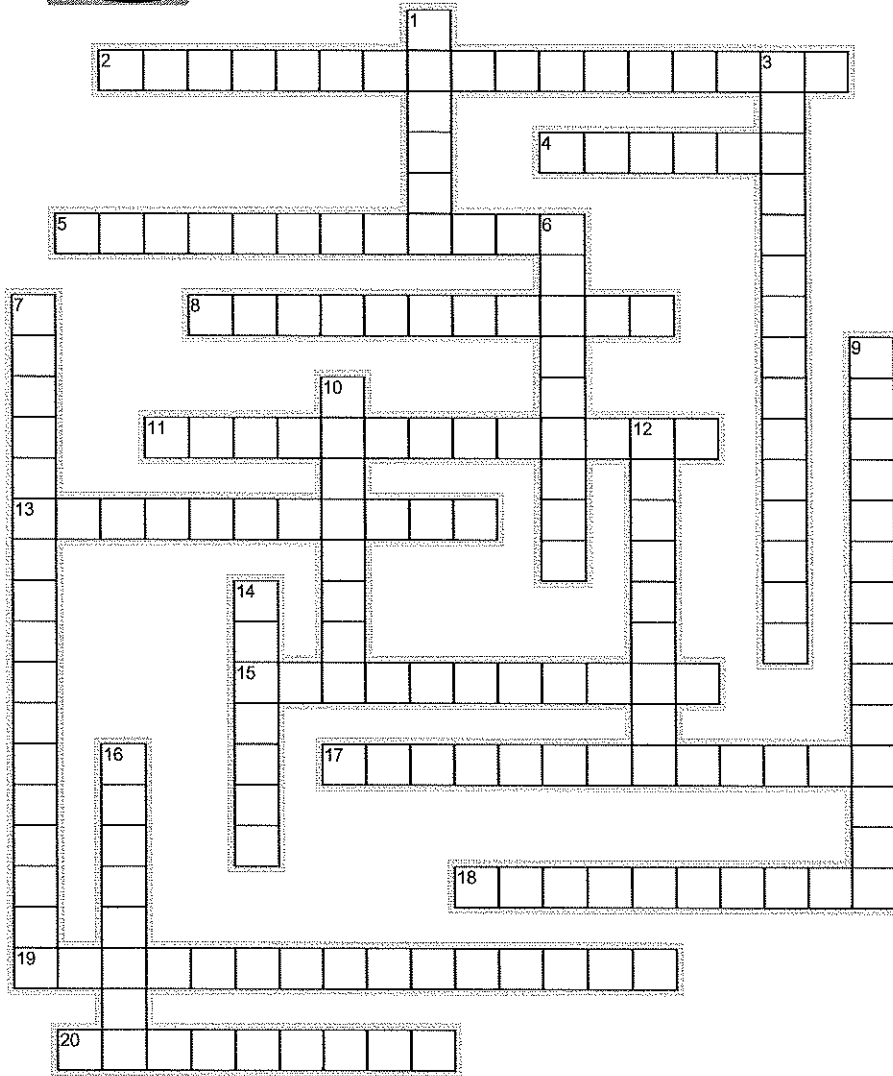
Name: \_\_\_\_\_

Date: \_\_\_\_\_



# LAB EQUIPMENT - PART 1

## DIAGRAM Crossword


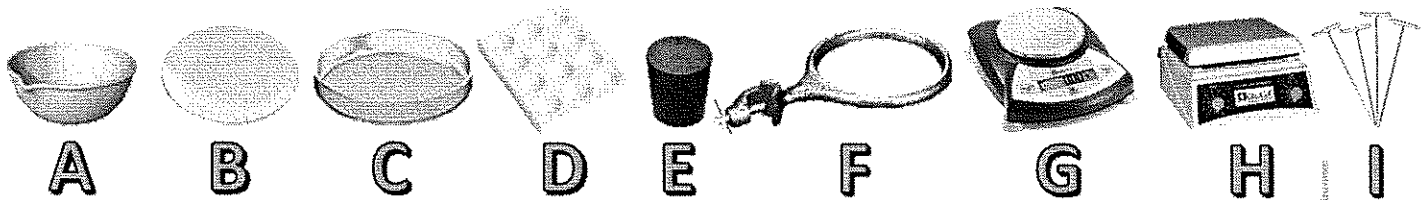


### ACROSS

2. Identify O in the diagram.
4. Identify S in the diagram.
5. Identify Q in the diagram.
8. Identify M in the diagram.
11. Identify R in the diagram.
13. Identify T in the diagram.
15. Identify P in the diagram.
17. Identify J in the diagram.
18. Identify B in the diagram.
19. Identify A in the diagram.
20. Identify C in the diagram.

### DOWN

1. Identify L in the diagram.
3. Identify K in the diagram.
6. Identify F in the diagram.
7. Identify G in the diagram.
9. Identify I in the diagram.
10. Identify N in the diagram.
12. Identify D in the diagram.
14. Identify E in the diagram.
16. Identify H in the diagram.



## Lab Equipment Crossword

### Word Bank

Funnel  
Dissecting Pins  
Florence Flask  
Evaporating Dish  
Retort Stand  
Graduated Cylinder  
Stopper  
Watch Glass  
Test Tube  
Beaker  
Erlenmeyer flask  
Test Tube Clamp  
Bunsen burner  
Petri dish  
Electronic Balance  
Overflow Can  
Beaker Tongs  
Spot Plate  
Hot Plate  
Ring Clamp